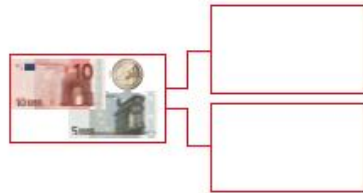
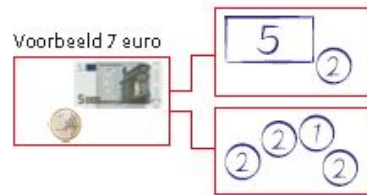


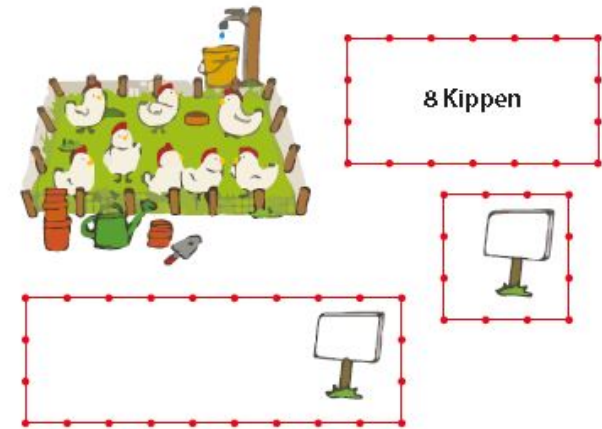
**Ik kan er op 2 manieren 15 euro van maken**



**Boek 3b blok 2: Op de kinderboerderij**



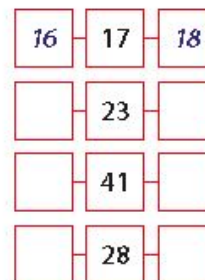
**Ik kan de verhouding zien**



**Ik kan aanvullen tot 10**

- |                  |                  |
|------------------|------------------|
| $4 + \dots = 10$ | $3 + \dots = 10$ |
| $7 + \dots = 10$ | $6 + \dots = 10$ |
| $2 + \dots = 10$ | $9 + \dots = 10$ |
| $5 + \dots = 10$ | $8 + \dots = 10$ |
| $1 + \dots = 10$ | $4 + \dots = 10$ |

**Ik kan de getallenlijn invullen**



**Ik kan tientallen en eenheden samenvoegen**

- |                   |                   |
|-------------------|-------------------|
| $12 = 10 + \dots$ | $19 = 10 + \dots$ |
| $15 = 10 + \dots$ | $16 = 10 + \dots$ |
| $11 = 10 + \dots$ | $13 = 10 + \dots$ |
| $18 = 10 + \dots$ | $17 = 10 + \dots$ |
| $14 = 10 + \dots$ | $20 = 10 + \dots$ |